

**PLUSSOMMEN
EN
MINSOMMEN
DEEL 2
MINSOMMEN**

a Hoofdrekenen.

$15 - 7 =$

$80 - 30 =$

$500 - 300 =$

$560 - 30 =$

$18 - 9 =$

$70 - 40 =$

$700 - 400 =$

$780 - 80 =$

$16 - 7 =$

$97 - 20 =$

$800 - 500 =$

$340 - 30 =$

$12 - 8 =$

$86 - 4 =$

$600 - 100 =$

$630 - 30 =$

$12 - 5 =$

$60 - 5 =$

$900 - 600 =$

$850 - 40 =$

b Maak deze sommen.

$684 - 332 =$

H	T	E
6	8	4
<hr/>		

$723 - 501 =$

H	T	E
7	2	3
<hr/>		

$846 - 540 =$

H	T	E
8	4	6
<hr/>		



$968 - 650 =$

H	T	E
9	6	8
<hr/>		

$653 - 402 =$

H	T	E
6	5	3
<hr/>		

$765 - 342 =$

H	T	E
7	6	5
<hr/>		

$786 - 430 =$

H	T	E
7	8	6
<hr/>		

$867 - 42 =$

H	T	E
8	6	7
<hr/>		

$837 - 216 =$

H	T	E
8	3	7
<hr/>		

$758 - 40 =$

H	T	E
7	5	8
<hr/>		

$585 - 333 =$

H	T	E
5	8	5
<hr/>		

a Hoofdrekenen.

$14 - 6 =$

$90 - 60 =$

$600 - 200 =$

$650 - 40 =$

$15 - 8 =$

$70 - 50 =$

$800 - 500 =$

$870 - 60 =$

$16 - 9 =$

$88 - 30 =$

$900 - 600 =$

$430 - 20 =$

$12 - 7 =$

$97 - 6 =$

$700 - 200 =$

$360 - 40 =$

$13 - 6 =$

$40 - 6 =$

$800 - 700 =$

$580 - 70 =$

b Maak deze sommen.

$887 - 436 =$

$663 - 402 =$

$864 - 450 =$

$497 - 62 =$

H	T	E
8	8	7
<hr/>		

H	T	E
6	6	3
<hr/>		

H	T	E
8	6	4
<hr/>		

H	T	E
4	9	7
<hr/>		

$558 - 250 =$

$965 - 502 =$

$687 - 330 =$

H	T	E
5	5	8
<hr/>		

H	T	E
9	6	5
<hr/>		



H	T	E
6	8	7
<hr/>		

$776 - 42 =$

$947 - 226 =$

$899 - 50 =$

$695 - 444 =$

H	T	E
7	7	6
<hr/>		

H	T	E
9	4	7
<hr/>		

H	T	E
8	9	9
<hr/>		

H	T	E
6	9	5
<hr/>		

a Hoofdrekenen.

17 - 8 =

86 - 5 =

600 - 300 =

560 - 200 =

16 - 9 =

60 - 30 =

800 - 600 =

730 - 700 =

17 - 9 =

50 - 7 =

900 - 400 =

850 - 300 =

13 - 4 =

90 - 70 =

700 - 500 =

650 - 500 =

12 - 6 =

80 - 60 =

900 - 800 =

980 - 900 =

b Maak deze sommen.

785 - 38 =

678 - 339 =

776 - 408 =

575 - 18 =

H	T	E
7	8	5
<hr/>		

H	T	E
6	7	8
<hr/>		

H	T	E
7	7	6
<hr/>		

H	T	E
5	7	5
<hr/>		

683 - 45 =

765 - 308 =

858 - 239 =

H	T	E
6	8	3
<hr/>		

H	T	E
7	6	5
<hr/>		

H	T	E
8	5	8
<hr/>		



656 - 28 =

984 - 448 =

794 - 307 =

444 - 109 =

H	T	E
6	5	6
<hr/>		

H	T	E
9	8	4
<hr/>		

H	T	E
7	9	4
<hr/>		

H	T	E
4	4	4
<hr/>		

a Schatten.

Je kunt kiezen uit: 100, 200, 300, 400, 500, 600, 700, 800, 900, 1000.

Schrijf achter de pijl steeds welk getal er het dichtst bij ligt.

805 - 302 →

706 - 402 →

905 - 603 →

612 - 201 →

814 - 303 →

712 - 503 →

409 - 305 →

507 - 406 →

806 - 303 →

715 - 404 →

816 - 504 →

714 - 107 →

b Maak deze sommen.

452 - 227 =

685 - 38 =

750 - 323 =

485 - 407 =

H	T	E
4	5	2
<hr/>		

H	T	E
<hr/>		

H	T	E
<hr/>		


H	T	E
<hr/>		

853 - 426 =

940 - 313 =

686 - 607 =

H	T	E
<hr/>		



H	T	E
<hr/>		

H	T	E
<hr/>		

764 - 216 =

875 - 46 =

880 - 555 =

775 - 406 =

H	T	E
<hr/>		

H	T	E
<hr/>		

H	T	E
<hr/>		

H	T	E
<hr/>		

a Hoofdrekenen.

- | | | | |
|------------|-------------|--------------|--------------|
| $13 - 8 =$ | $86 - 5 =$ | $528 - 6 =$ | $338 - 20 =$ |
| $17 - 8 =$ | $74 - 4 =$ | $433 - 3 =$ | $348 - 20 =$ |
| $14 - 8 =$ | $30 - 3 =$ | $450 - 20 =$ | $358 - 20 =$ |
| $12 - 8 =$ | $57 - 30 =$ | $457 - 20 =$ | $368 - 20 =$ |
| $16 - 8 =$ | $40 - 10 =$ | $467 - 20 =$ | $378 - 20 =$ |

b Maak deze sommen.

$$675 - 328 =$$

H	T	E
6	7	5

$$985 - 38 =$$

H	T	E

$$650 - 423 =$$

H	T	E

$$465 - 129 =$$

H	T	E

$$576 - 238 =$$

H	T	E

$$735 - 419 =$$

H	T	E

$$882 - 48 =$$

H	T	E

$$932 - 618 =$$

H	T	E

$$756 - 427 =$$

H	T	E

$$537 - 419 =$$

H	T	E




$$774 - 56 =$$

H	T	E

a Hoofdrekenen.

- | | | | |
|----------|-----------|------------|------------|
| 14 - 9 = | 96 - 5 = | 688 - 7 = | 448 - 30 = |
| 15 - 8 = | 83 - 3 = | 444 - 4 = | 648 - 30 = |
| 16 - 7 = | 40 - 4 = | 570 - 20 = | 338 - 30 = |
| 11 - 4 = | 67 - 20 = | 572 - 20 = | 668 - 30 = |
| 12 - 5 = | 80 - 30 = | 582 - 20 = | 778 - 30 = |

b Maak deze sommen.

<div style="border: 1px solid black; padding: 2px; width: fit-content; margin: 0 auto;">384 - 257 =</div> <table border="1" style="width: 100%; text-align: center; border-collapse: collapse;"> <tr><th>H</th><th>T</th><th>E</th></tr> <tr><td> </td><td> </td><td> </td></tr> <tr><td> </td><td> </td><td> </td></tr> <tr><td> </td><td> </td><td> </td></tr> <tr><td>3</td><td>8</td><td>4</td></tr> <tr><td> </td><td> </td><td> </td></tr> <tr><td colspan="3" style="border-top: 1px solid black;"> </td></tr> </table>	H	T	E										3	8	4							<div style="border: 1px solid black; padding: 2px; width: fit-content; margin: 0 auto;">884 - 37 =</div> <table border="1" style="width: 100%; text-align: center; border-collapse: collapse;"> <tr><th>H</th><th>T</th><th>E</th></tr> <tr><td> </td><td> </td><td> </td></tr> <tr><td> </td><td> </td><td> </td></tr> <tr><td> </td><td> </td><td> </td></tr> <tr><td> </td><td> </td><td> </td></tr> <tr><td> </td><td> </td><td> </td></tr> <tr><td colspan="3" style="border-top: 1px solid black;"> </td></tr> </table>	H	T	E																			<div style="border: 1px solid black; padding: 2px; width: fit-content; margin: 0 auto;">750 - 424 =</div> <table border="1" style="width: 100%; text-align: center; border-collapse: collapse;"> <tr><th>H</th><th>T</th><th>E</th></tr> <tr><td> </td><td> </td><td> </td></tr> <tr><td> </td><td> </td><td> </td></tr> <tr><td> </td><td> </td><td> </td></tr> <tr><td> </td><td> </td><td> </td></tr> <tr><td> </td><td> </td><td> </td></tr> <tr><td colspan="3" style="border-top: 1px solid black;"> </td></tr> </table>	H	T	E																			<div style="border: 1px solid black; padding: 2px; width: fit-content; margin: 0 auto;">661 - 427 =</div> <table border="1" style="width: 100%; text-align: center; border-collapse: collapse;"> <tr><th>H</th><th>T</th><th>E</th></tr> <tr><td> </td><td> </td><td> </td></tr> <tr><td> </td><td> </td><td> </td></tr> <tr><td> </td><td> </td><td> </td></tr> <tr><td> </td><td> </td><td> </td></tr> <tr><td> </td><td> </td><td> </td></tr> <tr><td colspan="3" style="border-top: 1px solid black;"> </td></tr> </table>	H	T	E																		
H	T	E																																																																																					
3	8	4																																																																																					
H	T	E																																																																																					
H	T	E																																																																																					
H	T	E																																																																																					
<div style="border: 1px solid black; padding: 2px; width: fit-content; margin: 0 auto;">765 - 337 =</div> <table border="1" style="width: 100%; text-align: center; border-collapse: collapse;"> <tr><th>H</th><th>T</th><th>E</th></tr> <tr><td> </td><td> </td><td> </td></tr> <tr><td> </td><td> </td><td> </td></tr> <tr><td> </td><td> </td><td> </td></tr> <tr><td> </td><td> </td><td> </td></tr> <tr><td> </td><td> </td><td> </td></tr> <tr><td colspan="3" style="border-top: 1px solid black;"> </td></tr> </table>	H	T	E																			<div style="border: 1px solid black; padding: 2px; width: fit-content; margin: 0 auto;">742 - 318 =</div> <table border="1" style="width: 100%; text-align: center; border-collapse: collapse;"> <tr><th>H</th><th>T</th><th>E</th></tr> <tr><td> </td><td> </td><td> </td></tr> <tr><td> </td><td> </td><td> </td></tr> <tr><td> </td><td> </td><td> </td></tr> <tr><td> </td><td> </td><td> </td></tr> <tr><td> </td><td> </td><td> </td></tr> <tr><td colspan="3" style="border-top: 1px solid black;"> </td></tr> </table>	H	T	E																			<div style="border: 1px solid black; padding: 2px; width: fit-content; margin: 0 auto;">783 - 38 =</div> <table border="1" style="width: 100%; text-align: center; border-collapse: collapse;"> <tr><th>H</th><th>T</th><th>E</th></tr> <tr><td> </td><td> </td><td> </td></tr> <tr><td> </td><td> </td><td> </td></tr> <tr><td> </td><td> </td><td> </td></tr> <tr><td> </td><td> </td><td> </td></tr> <tr><td> </td><td> </td><td> </td></tr> <tr><td colspan="3" style="border-top: 1px solid black;"> </td></tr> </table>	H	T	E																			<div style="border: 1px solid black; padding: 2px; width: fit-content; margin: 0 auto;">350 - 135 =</div> <table border="1" style="width: 100%; text-align: center; border-collapse: collapse;"> <tr><th>H</th><th>T</th><th>E</th></tr> <tr><td> </td><td> </td><td> </td></tr> <tr><td> </td><td> </td><td> </td></tr> <tr><td> </td><td> </td><td> </td></tr> <tr><td> </td><td> </td><td> </td></tr> <tr><td> </td><td> </td><td> </td></tr> <tr><td colspan="3" style="border-top: 1px solid black;"> </td></tr> </table>	H	T	E																		
H	T	E																																																																																					
H	T	E																																																																																					
H	T	E																																																																																					
H	T	E																																																																																					
<div style="border: 1px solid black; padding: 2px; width: fit-content; margin: 0 auto;">563 - 428 =</div> <table border="1" style="width: 100%; text-align: center; border-collapse: collapse;"> <tr><th>H</th><th>T</th><th>E</th></tr> <tr><td> </td><td> </td><td> </td></tr> <tr><td> </td><td> </td><td> </td></tr> <tr><td> </td><td> </td><td> </td></tr> <tr><td> </td><td> </td><td> </td></tr> <tr><td> </td><td> </td><td> </td></tr> <tr><td colspan="3" style="border-top: 1px solid black;"> </td></tr> </table>	H	T	E																				<div style="border: 1px solid black; padding: 2px; width: fit-content; margin: 0 auto;">950 - 732 =</div> <table border="1" style="width: 100%; text-align: center; border-collapse: collapse;"> <tr><th>H</th><th>T</th><th>E</th></tr> <tr><td> </td><td> </td><td> </td></tr> <tr><td> </td><td> </td><td> </td></tr> <tr><td> </td><td> </td><td> </td></tr> <tr><td> </td><td> </td><td> </td></tr> <tr><td> </td><td> </td><td> </td></tr> <tr><td colspan="3" style="border-top: 1px solid black;"> </td></tr> </table>	H	T	E																			<div style="border: 1px solid black; padding: 2px; width: fit-content; margin: 0 auto;">621 - 12 =</div> <table border="1" style="width: 100%; text-align: center; border-collapse: collapse;"> <tr><th>H</th><th>T</th><th>E</th></tr> <tr><td> </td><td> </td><td> </td></tr> <tr><td> </td><td> </td><td> </td></tr> <tr><td> </td><td> </td><td> </td></tr> <tr><td> </td><td> </td><td> </td></tr> <tr><td> </td><td> </td><td> </td></tr> <tr><td colspan="3" style="border-top: 1px solid black;"> </td></tr> </table>	H	T	E																																							
H	T	E																																																																																					
H	T	E																																																																																					
H	T	E																																																																																					

a Hoofdrekenen.

- | | | | |
|------------|------------|--------------|---------------|
| $14 - 8 =$ | $13 - 9 =$ | $453 - 50 =$ | $730 - 700 =$ |
| $24 - 8 =$ | $23 - 9 =$ | $748 - 40 =$ | $850 - 300 =$ |
| $34 - 8 =$ | $43 - 9 =$ | $672 - 70 =$ | $680 - 400 =$ |
| $44 - 8 =$ | $73 - 9 =$ | $937 - 30 =$ | $570 - 500 =$ |
| $54 - 8 =$ | $93 - 9 =$ | $864 - 60 =$ | $940 - 500 =$ |

b Maak deze sommen.

$658 - 73 =$

H	T	E
6	5	8
<hr/>		

$436 - 254 =$

H	T	E

$350 - 170 =$

H	T	E

$805 - 423 =$

H	T	E

$800 - 530 =$

H	T	E

$406 - 224 =$

H	T	E

$940 - 270 =$

H	T	E



$568 - 83 =$

H	T	E

$830 - 380 =$

H	T	E

$756 - 361 =$

H	T	E

$860 - 570 =$

H	T	E

a Hoofdrekenen.

- | | | | |
|------------|------------|--------------|---------------|
| $16 - 7 =$ | $15 - 6 =$ | $356 - 50 =$ | $530 - 500 =$ |
| $26 - 7 =$ | $25 - 6 =$ | $947 - 40 =$ | $690 - 600 =$ |
| $36 - 7 =$ | $45 - 6 =$ | $763 - 60 =$ | $920 - 900 =$ |
| $46 - 7 =$ | $75 - 6 =$ | $598 - 90 =$ | $830 - 800 =$ |
| $56 - 7 =$ | $95 - 6 =$ | $489 - 80 =$ | $770 - 700 =$ |

b Maak deze sommen.

$348 - 273 =$

H	T	E
3	4	8
—		

$636 - 452 =$

H	T	E
—		

$440 - 360 =$

H	T	E
—		

$702 - 321 =$

H	T	E
—		

$900 - 470 =$

H	T	E
—		

$855 - 61 =$

H	T	E
—		

$504 - 323 =$

H	T	E
—		

$660 - 380 =$

H	T	E
—		



$660 - 370 =$

H	T	E
—		

$746 - 451 =$

H	T	E
—		

$930 - 470 =$

H	T	E
—		

a Hoofdrekenen.

12 - 8 =

40 - 4 =

502 - 4 =

732 - 30 =

15 - 7 =

53 - 20 =

803 - 5 =

742 - 40 =

13 - 6 =

80 - 8 =

701 - 6 =

752 - 50 =

14 - 9 =

94 - 60 =

904 - 5 =

762 - 60 =

16 - 9 =

75 - 74 =

603 - 6 =

772 - 70 =

b Maak deze sommen.

920 - 550 =

H	T	E
9	2	0
<hr/>		

824 - 461 =

H	T	E
<hr/>		

740 - 480 =

H	T	E
<hr/>		

678 - 95 =

H	T	E
<hr/>		

855 - 64 =

H	T	E
<hr/>		

900 - 620 =

H	T	E
<hr/>		

670 - 380 =

H	T	E
<hr/>		



506 - 323 =

H	T	E
<hr/>		

440 - 280 =

H	T	E
<hr/>		

527 - 284 =

H	T	E
<hr/>		

884 - 93 =

H	T	E
<hr/>		

a Hoofdrekenen.

- | | | | |
|------------|-------------|-------------|--------------|
| $13 - 4 =$ | $60 - 7 =$ | $403 - 5 =$ | $943 - 40 =$ |
| $15 - 6 =$ | $63 - 20 =$ | $602 - 4 =$ | $953 - 50 =$ |
| $17 - 8 =$ | $90 - 9 =$ | $801 - 6 =$ | $963 - 60 =$ |
| $19 - 9 =$ | $84 - 50 =$ | $703 - 5 =$ | $973 - 70 =$ |
| $11 - 7 =$ | $67 - 62 =$ | $504 - 8 =$ | $983 - 80 =$ |

b Maak deze sommen.

$663 - 274 =$

H	T	E
6	6	3

$756 - 392 =$

H	T	E

$834 - 553 =$

H	T	E

$966 - 574 =$

H	T	E

$700 - 470 =$

H	T	E

$840 - 470 =$

H	T	E

$904 - 433 =$

H	T	E

$506 - 274 =$

H	T	E

$865 - 473 =$

H	T	E

$662 - 491 =$

H	T	E

$864 - 573 =$

H	T	E



a Hoofdrekenen.

15 - 9 =

84 - 80 =

203 - 4 =

580 - 200 =

25 - 9 =

75 - 30 =

402 - 5 =

740 - 300 =

45 - 9 =

60 - 6 =

503 - 6 =

830 - 500 =

75 - 9 =

95 - 93 =

701 - 7 =

660 - 400 =

95 - 9 =

58 - 55 =

802 - 3 =

920 - 700 =

b Maak deze sommen.

823 - 145 =

635 - 58 =

550 - 278 =

H	T	E
8	2	3
<hr/>		

H	T	E
<hr/>		

H	T	E
<hr/>		



472 - 279 =

404 - 237 =

727 - 438 =

660 - 387 =

H	T	E
<hr/>		

H	T	E
<hr/>		

H	T	E
<hr/>		

H	T	E
<hr/>		

883 - 389 =

940 - 577 =

853 - 68 =

605 - 426 =

H	T	E
<hr/>		

H	T	E
<hr/>		

H	T	E
<hr/>		

H	T	E
<hr/>		

a Schatten.

Je kunt kiezen uit: 100, 200, 300, 400, 500, 600, 700, 800, 900, 1000.

Schrijf achter de pijl steeds welk getal er het dichtst bij ligt.

706 - 402 →

907 - 506 →

806 - 203 →

614 - 503 →

504 - 303 →

604 - 402 →

309 - 206 →

712 - 404 →

405 - 103 →

814 - 405 →

214 - 7 →

707 - 505 →

b Maak deze sommen.

732 - 145 =

740 - 278 =

545 - 256 =

700 - 548 =

H	T	E
7	3	2
<hr/>		

H	T	E
<hr/>		

H	T	E
<hr/>		

H	T	E
<hr/>		

823 - 367 =

600 - 323 =

605 - 327 =

H	T	E
<hr/>		

H	T	E
<hr/>		



H	T	E
<hr/>		

838 - 389 =

440 - 287 =

772 - 484 =

900 - 412 =

H	T	E
<hr/>		

H	T	E
<hr/>		

H	T	E
<hr/>		

H	T	E
<hr/>		

a Hoofdrekenen.

14 - 8 =

50 - 4 =

203 - 202 =

802 - 801 =

13 - 7 =

80 - 6 =

203 - 201 =

802 - 800 =

12 - 5 =

90 - 3 =

203 - 200 =

802 - 799 =

15 - 9 =

40 - 7 =

203 - 199 =

802 - 798 =

11 - 7 =

70 - 5 =

203 - 198 =

802 - 797 =

b Maak deze sommen.

562 - 375 =

H	T	E
5	6	2
—		

752 - 268 =

H	T	E
—		

920 - 468 =

H	T	E
—		

800 - 663 =

H	T	E
—		

463 - 278 =

H	T	E
—		

730 - 487 =

H	T	E
—		

500 - 433 =

H	T	E
—		

901 - 587 =


H	T	E
—		

643 - 356 =

H	T	E
—		

681 - 494 =

H	T	E
—		




700 - 199 =

H	T	E
—		

a Hoofdrekenen.

- | | | | |
|------------|------------|---------------|---------------|
| $17 - 8 =$ | $60 - 7 =$ | $304 - 303 =$ | $702 - 701 =$ |
| $16 - 7 =$ | $80 - 4 =$ | $405 - 404 =$ | $702 - 700 =$ |
| $13 - 5 =$ | $40 - 6 =$ | $606 - 605 =$ | $702 - 699 =$ |
| $14 - 6 =$ | $50 - 7 =$ | $807 - 806 =$ | $702 - 698 =$ |
| $15 - 9 =$ | $70 - 8 =$ | $907 - 906 =$ | $702 - 697 =$ |

b Maak deze sommen.


$623 - 354 =$ <table border="1" style="width: 100%; text-align: center;"> <tr><th>H</th><th>T</th><th>E</th></tr> <tr><td> </td><td> </td><td> </td></tr> <tr><td> </td><td> </td><td> </td></tr> <tr><td>6</td><td>2</td><td>3</td></tr> <tr><td colspan="3"><hr/></td></tr> <tr><td> </td><td> </td><td> </td></tr> </table>	H	T	E							6	2	3	<hr/>							$750 - 368 =$ <table border="1" style="width: 100%; text-align: center;"> <tr><th>H</th><th>T</th><th>E</th></tr> <tr><td> </td><td> </td><td> </td></tr> <tr><td> </td><td> </td><td> </td></tr> <tr><td> </td><td> </td><td> </td></tr> <tr><td> </td><td> </td><td> </td></tr> <tr><td colspan="3"><hr/></td></tr> <tr><td> </td><td> </td><td> </td></tr> </table>	H	T	E													<hr/>						$803 - 327 =$ <table border="1" style="width: 100%; text-align: center;"> <tr><th>H</th><th>T</th><th>E</th></tr> <tr><td> </td><td> </td><td> </td></tr> <tr><td> </td><td> </td><td> </td></tr> <tr><td> </td><td> </td><td> </td></tr> <tr><td> </td><td> </td><td> </td></tr> <tr><td colspan="3"><hr/></td></tr> <tr><td> </td><td> </td><td> </td></tr> </table>	H	T	E													<hr/>																													
H	T	E																																																																																					
6	2	3																																																																																					
<hr/>																																																																																							
H	T	E																																																																																					
<hr/>																																																																																							
H	T	E																																																																																					
<hr/>																																																																																							
$872 - 479 =$ <table border="1" style="width: 100%; text-align: center;"> <tr><th>H</th><th>T</th><th>E</th></tr> <tr><td> </td><td> </td><td> </td></tr> <tr><td> </td><td> </td><td> </td></tr> <tr><td> </td><td> </td><td> </td></tr> <tr><td> </td><td> </td><td> </td></tr> <tr><td colspan="3"><hr/></td></tr> <tr><td> </td><td> </td><td> </td></tr> </table>	H	T	E													<hr/>						$805 - 427 =$ <table border="1" style="width: 100%; text-align: center;"> <tr><th>H</th><th>T</th><th>E</th></tr> <tr><td> </td><td> </td><td> </td></tr> <tr><td> </td><td> </td><td> </td></tr> <tr><td> </td><td> </td><td> </td></tr> <tr><td> </td><td> </td><td> </td></tr> <tr><td colspan="3"><hr/></td></tr> <tr><td> </td><td> </td><td> </td></tr> </table>	H	T	E													<hr/>						$271 - 182 =$ <table border="1" style="width: 100%; text-align: center;"> <tr><th>H</th><th>T</th><th>E</th></tr> <tr><td> </td><td> </td><td> </td></tr> <tr><td> </td><td> </td><td> </td></tr> <tr><td> </td><td> </td><td> </td></tr> <tr><td> </td><td> </td><td> </td></tr> <tr><td colspan="3"><hr/></td></tr> <tr><td> </td><td> </td><td> </td></tr> </table>	H	T	E													<hr/>						$950 - 678 =$ <table border="1" style="width: 100%; text-align: center;"> <tr><th>H</th><th>T</th><th>E</th></tr> <tr><td> </td><td> </td><td> </td></tr> <tr><td> </td><td> </td><td> </td></tr> <tr><td> </td><td> </td><td> </td></tr> <tr><td> </td><td> </td><td> </td></tr> <tr><td colspan="3"><hr/></td></tr> <tr><td> </td><td> </td><td> </td></tr> </table>	H	T	E													<hr/>					
H	T	E																																																																																					
<hr/>																																																																																							
H	T	E																																																																																					
<hr/>																																																																																							
H	T	E																																																																																					
<hr/>																																																																																							
H	T	E																																																																																					
<hr/>																																																																																							
$838 - 389 =$ <table border="1" style="width: 100%; text-align: center;"> <tr><th>H</th><th>T</th><th>E</th></tr> <tr><td> </td><td> </td><td> </td></tr> <tr><td> </td><td> </td><td> </td></tr> <tr><td> </td><td> </td><td> </td></tr> <tr><td> </td><td> </td><td> </td></tr> <tr><td colspan="3"><hr/></td></tr> <tr><td> </td><td> </td><td> </td></tr> </table>	H	T	E													<hr/>						$660 - 586 =$ <table border="1" style="width: 100%; text-align: center;"> <tr><th>H</th><th>T</th><th>E</th></tr> <tr><td> </td><td> </td><td> </td></tr> <tr><td> </td><td> </td><td> </td></tr> <tr><td> </td><td> </td><td> </td></tr> <tr><td> </td><td> </td><td> </td></tr> <tr><td colspan="3"><hr/></td></tr> <tr><td> </td><td> </td><td> </td></tr> </table>	H	T	E													<hr/>						$358 - 68 =$ <table border="1" style="width: 100%; text-align: center;"> <tr><th>H</th><th>T</th><th>E</th></tr> <tr><td> </td><td> </td><td> </td></tr> <tr><td> </td><td> </td><td> </td></tr> <tr><td> </td><td> </td><td> </td></tr> <tr><td> </td><td> </td><td> </td></tr> <tr><td colspan="3"><hr/></td></tr> <tr><td> </td><td> </td><td> </td></tr> </table>	H	T	E													<hr/>						$508 - 329 =$ <table border="1" style="width: 100%; text-align: center;"> <tr><th>H</th><th>T</th><th>E</th></tr> <tr><td> </td><td> </td><td> </td></tr> <tr><td> </td><td> </td><td> </td></tr> <tr><td> </td><td> </td><td> </td></tr> <tr><td> </td><td> </td><td> </td></tr> <tr><td colspan="3"><hr/></td></tr> <tr><td> </td><td> </td><td> </td></tr> </table>	H	T	E													<hr/>					
H	T	E																																																																																					
<hr/>																																																																																							
H	T	E																																																																																					
<hr/>																																																																																							
H	T	E																																																																																					
<hr/>																																																																																							
H	T	E																																																																																					
<hr/>																																																																																							

a Hoofdrekenen.

$12 - 8 =$	$75 - 60 =$	$505 - 6 =$	$805 - 200 =$
$13 - 5 =$	$83 - 70 =$	$804 - 6 =$	$815 - 200 =$
$14 - 7 =$	$92 - 80 =$	$903 - 6 =$	$825 - 200 =$
$15 - 8 =$	$64 - 50 =$	$402 - 6 =$	$835 - 200 =$
$16 - 9 =$	$57 - 40 =$	$301 - 6 =$	$845 - 200 =$

b Maak deze sommen.

$412 - 89 =$	$935 - 487 =$	$704 - 327 =$	$519 - 393 =$
$583 - 247 =$	$840 - 309 =$	$587 - 388 =$	$458 - 309 =$
$908 - 435 =$	$900 - 474 =$	$440 - 270 =$	$873 - 118 =$
$637 - 587 =$	$677 - 85 =$	$306 - 108 =$	$676 - 258 =$
$750 - 314 =$	$550 - 278 =$	$493 - 317 =$	$535 - 395 =$
$800 - 407 =$	$912 - 69 =$	$747 - 163 =$	$467 - 271 =$
$945 - 393 =$	$726 - 207 =$	$488 - 314 =$	$763 - 265 =$
$786 - 137 =$	$438 - 384 =$	$857 - 165 =$	$902 - 169 =$
$605 - 184 =$	$379 - 198 =$	$259 - 237 =$	$538 - 129 =$
$569 - 487 =$	$654 - 105 =$	$600 - 337 =$	$675 - 376 =$

c Hoeveel plaatsen blijven er leeg?

In een circustent kunnen 750 mensen zitten.

- Op maandag worden er 628 kaartjes verkocht.
Er blijven _____ stoelen leeg.
- Op dinsdag worden er 476 kaartjes verkocht.
Er blijven _____ stoelen leeg.
- Op woensdag worden er 683 kaartjes verkocht.
Er blijven _____ stoelen leeg.
- Op vrijdag worden er 597 kaartjes verkocht.
Er blijven _____ stoelen leeg.


a Schatten.

Je kunt kiezen uit: 100, 200, 300, 400, 500, 600, 700, 800, 900, 1000.
Schrijf achter de pijl steeds welk getal er het dichtst bij ligt.

910 - 507 →	798 - 503 →	993 - 803 →	705 - 593 →
795 - 402 →	483 - 298 →	408 - 296 →	896 - 505 →
608 - 198 →	607 - 495 →	392 - 202 →	203 - 98 →
892 - 695 →	527 - 314 →	989 - 108 →	504 - 197 →

b Maak deze sommen.

734 - 190 =	926 - 157 =	294 - 109 =	746 - 286 =
829 - 155 =	474 - 284 =	662 - 265 =	900 - 133 =
632 - 250 =	609 - 345 =	534 - 252 =	406 - 135 =
569 - 356 =	719 - 629 =	667 - 358 =	735 - 198 =
409 - 263 =	482 - 278 =	251 - 219 =	487 - 319 =
340 - 260 =	583 - 378 =	452 - 209 =	705 - 187 =
488 - 293 =	785 - 193 =	673 - 183 =	654 - 339 =
717 - 343 =	519 - 372 =	930 - 676 =	577 - 384 =
945 - 135 =	860 - 180 =	879 - 193 =	469 - 158 =
808 - 109 =	300 - 126 =	361 - 75 =	600 - 280 =

c Hoeveel mensen zitten er nog in de trein?

- In de trein zitten 235 mensen.
Er stappen 157 mensen uit.
Nu zitten er nog _____ mensen in.
- In de sneltrein zitten 483 mensen.
Er stappen 190 mensen uit.
Nu zitten er nog _____ mensen in.
- In de stoptrein zitten 537 mensen.
Er stappen 148 mensen uit.
Nu zitten er nog _____ mensen in.
- In de trein naar Amsterdam zitten 622 mensen. Er stappen 449 mensen uit.
Nu zitten er nog _____ mensen in.


a Hoofdrekenen.

$15 - 9 =$	$63 - 30 =$	$603 - 9 =$	$907 - 400 =$
$17 - 9 =$	$87 - 70 =$	$507 - 9 =$	$967 - 400 =$
$12 - 3 =$	$96 - 60 =$	$301 - 9 =$	$937 - 400 =$
$13 - 7 =$	$72 - 40 =$	$406 - 9 =$	$917 - 400 =$
$17 - 8 =$	$55 - 40 =$	$202 - 9 =$	$997 - 400 =$

b Maak deze sommen.

$436 - 245 =$	$742 - 139 =$	$340 - 190 =$	$835 - 726 =$
$726 - 176 =$	$803 - 338 =$	$767 - 87 =$	$651 - 212 =$
$617 - 168 =$	$481 - 187 =$	$910 - 170 =$	$384 - 305 =$
$355 - 170 =$	$586 - 267 =$	$586 - 263 =$	$280 - 190 =$
$570 - 238 =$	$400 - 196 =$	$426 - 381 =$	$541 - 328 =$
$703 - 105 =$	$283 - 175 =$	$1000 - 33 =$	$750 - 137 =$
$431 - 119 =$	$457 - 208 =$	$593 - 196 =$	$639 - 68 =$
$642 - 239 =$	$506 - 124 =$	$444 - 145 =$	$945 - 137 =$
$808 - 135 =$	$663 - 271 =$	$880 - 179 =$	$562 - 328 =$
$963 - 154 =$	$864 - 458 =$	$656 - 329 =$	$437 - 194 =$

c Hoeveel geld houden ze steeds over?



- Joke heeft f 525,-. Ze koopt een fototoestel.
Ze houdt f _____ over.
- Piet heeft f 700,-. Hij koopt een fiets.
Hij houdt f _____ over.
- Ahmed heeft f 475,-. Hij koopt een horloge.
Hij houdt f _____ over.
- Loes heeft f 630,-. Ze koopt een crossfiets.
Ze houdt f _____ over.
- Stef heeft f 250,-. Hij koopt een kinderfiets.
Hij houdt f _____ over.

a Schatten.

Je kunt kiezen uit: 100, 200, 300, 400, 500, 600, 700, 800, 900, 1000.

Schrijf achter de pijl steeds welk getal er het dichtst bij ligt.

489 - 103 →	302 - 197 →	792 - 105 →	495 - 305 →
293 - 105 →	511 - 296 →	611 - 280 →	383 - 285 →
298 - 212 →	997 - 605 →	807 - 489 →	617 - 399 →
597 - 395 →	502 - 311 →	586 - 212 →	892 - 297 →

b Maak deze sommen.

585 - 338 =	900 - 238 =	636 - 219 =	829 - 430 =
609 - 247 =	978 - 165 =	369 - 277 =	543 - 263 =
717 - 445 =	657 - 263 =	500 - 343 =	467 - 388 =
476 - 268 =	729 - 130 =	483 - 319 =	658 - 263 =
883 - 118 =	205 - 198 =	569 - 268 =	950 - 239 =
294 - 179 =	349 - 182 =	536 - 227 =	658 - 234 =
926 - 740 =	659 - 237 =	527 - 381 =	491 - 237 =
409 - 312 =	775 - 129 =	463 - 266 =	984 - 159 =
734 - 188 =	510 - 160 =	675 - 238 =	509 - 273 =
819 - 173 =	461 - 248 =	313 - 196 =	472 - 425 =

c Hoeveel geld houden ze steeds over?

1. Jaap heeft f 400,-. Hij koopt een platenspeler.
Hij houdt f _____ over.
2. Joep heeft f 350,-. Hij koopt een cassette-recorder.
Hij houdt f _____ over.
3. De moeder van Jaap heeft f 1.000,-.
Ze koopt een wasmachine.
Zij houdt f _____ over.
4. Ze koopt ook een koffiezetapparaat.
Ze houdt dan nog f _____ over.
5. Vader heeft f 150,-. Hij koopt een scheer-apparaat.
Hij houdt f _____ over.